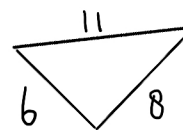
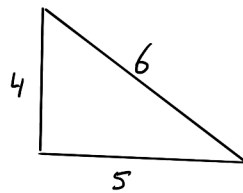
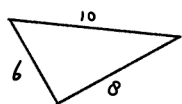
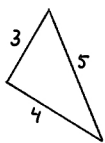
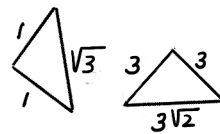
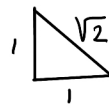
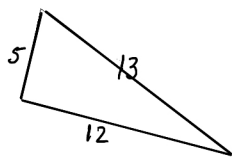
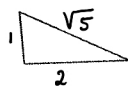
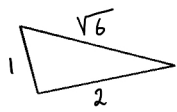
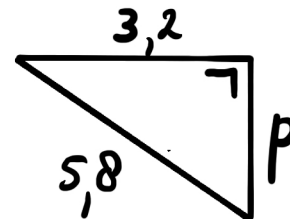
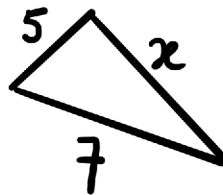
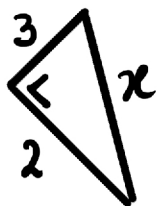
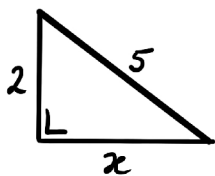




- 1) Welke van de onderstaande driehoeken zijn rechthoekig? Waarom wel of waarom niet? Geef elke rechte hoek aan met een symbooltje.



- 2) Schrijf zo mogelijk bij een driehoek de stelling van Pythagoras



- 3) Geef aan welke driehoeken in de figuur rechthoekig zijn en waarom. Teken in elke rechte hoek het 90-graden symbooltje.

